

Industrial Engineering Examples for Euler's Method for Ordinary Differential Equations
Autar Kaw

Example 1

The open loop response, that is, the speed of the motor to a voltage input of 20 V, assuming a system without damping is

$$20 = (0.02) \frac{dw}{dt} + (0.06)w .$$

If the initial speed is zero ($w(0) = 0$), and using Euler's method, what is the speed at $t = 0.8$ s? Assume a step size of $h = 0.4$ s.

Solution

$$\frac{dw}{dt} = 1000 - 3w$$

$$f(t, w) = 1000 - 3w$$

The Euler's method reduces to

$$w_{i+1} = w_i + f(t_i, w_i)h$$

For $i = 0$, $t_0 = 0$, $w_0 = 0$

$$\begin{aligned} w_1 &= w_0 + f(t_0, w_0)h \\ &= 0 + f(0,0) \times 0.4 \\ &= 0 + (1000 - 3 \times (0)) \times 0.4 \\ &= 0 + 1000 \times 0.4 \\ &= 400 \text{ rad/s} \end{aligned}$$

w_1 is the approximate speed of the motor at

$$t = t_1 = t_0 + h = 0 + 0.4 = 0.4 \text{ s}$$

$$w(0.4) \approx w_1 = 400 \text{ rad/s}$$

Source URL: <http://numericalmethods.eng.usf.edu/>
Saylor URL: <http://www.saylor.org/courses/me205/>

Attributed to: University of South Florida: Holistic Numerical Methods Institute



Saylor.org

For $i = 1$, $t_1 = 0.4$ s, $w_1 = 400$

$$\begin{aligned}w_2 &= w_1 + f(t_1, w_1)h \\&= 400.00 + f(0.4, 400) \times 0.4 \\&= 400.00 + (1000 - 3 \times 400) \times 0.4 \\&= 400 + (-200) \times 0.4 \\&= 320 \text{ rad/s}\end{aligned}$$

w_2 is the approximate speed of the motor at

$$t = t_2 = t_1 + h = 0.4 + 0.4 = 0.8 \text{ s}$$

$$w(0.8) \approx w_2 = 320 \text{ rad/s}$$

Figure 1 compares the exact solution with the numerical solution from Euler's method for the step size of $h = 0.4$ s.

Source URL: <http://numericalmethods.eng.usf.edu/>

Saylor URL: <http://www.saylor.org/courses/me205/>

Attributed to: University of South Florida: Holistic Numerical Methods Institute



Saylor.org

Page 2 of 6

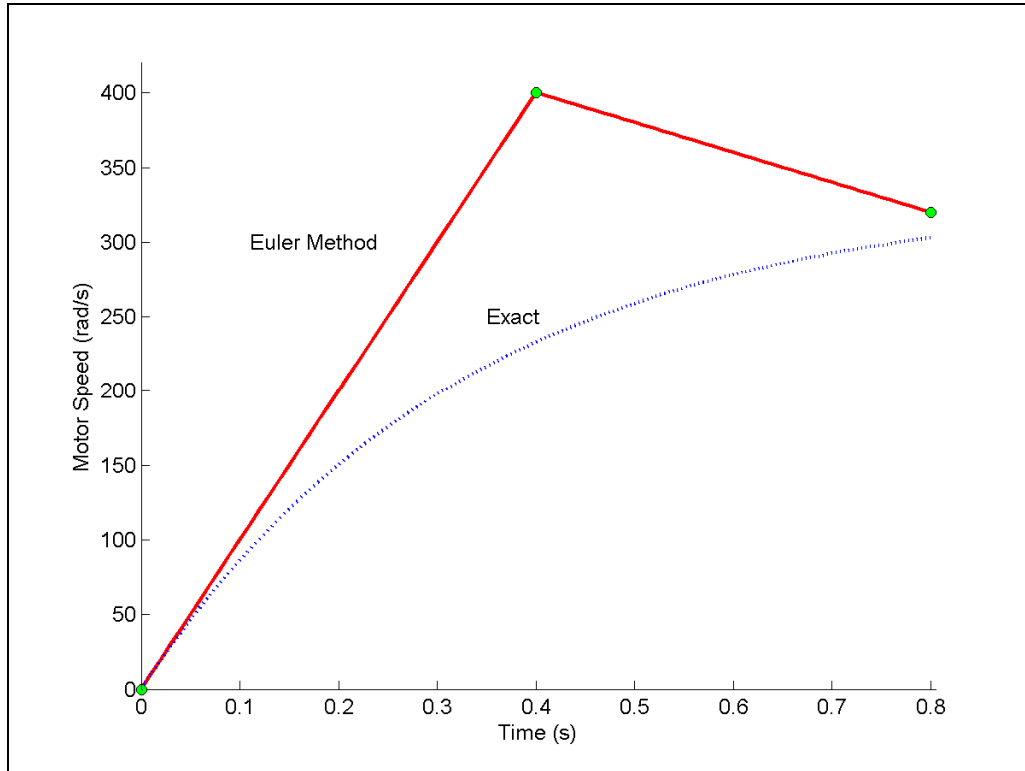


Figure 1 Comparing exact and Euler's method.

The problem was solved again using smaller step sizes. The results are given below in Table 1.

Table 1 Speed of motor at 0.8 seconds as a function of step size, h .

Step size, h	$w(0.8)$	E_t	$ \epsilon_t \%$
0.8	800	-496.91	163.95
0.4	320	-16.906	5.5778
0.2	324.8	-21.706	7.1615



0.1	314.18	-11.023	3.6370
0.05	308.58	-5.4890	1.8110

Figure 2 shows how the speed of the motor varies as a function of time for different step sizes.

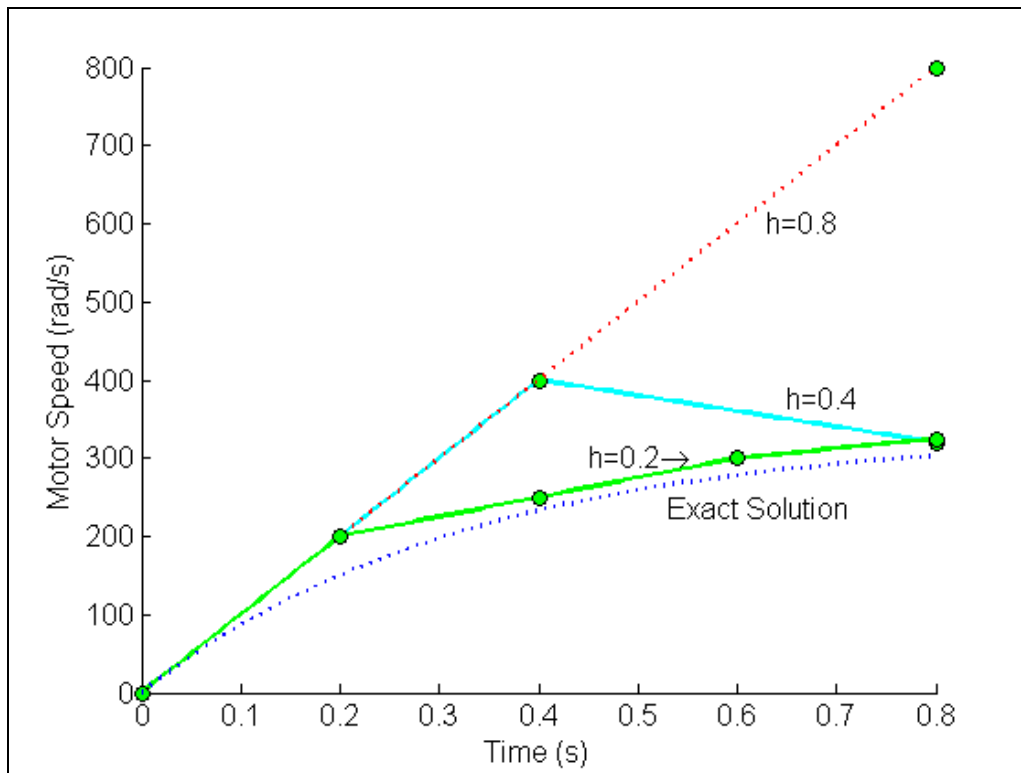


Figure 2 Comparison of Euler's method with exact solution for different step sizes.

The values of the calculated speed of the motor at $t = 0.8$ s as a function of step size are plotted in Figure 3.

Source URL: <http://numericalmethods.eng.usf.edu/>
 Saylor URL: <http://www.saylor.org/courses/me205/>

Attributed to: University of South Florida: Holistic Numerical Methods Institute



Saylor.org

Source URL: <http://numericalmethods.eng.usf.edu/>
Saylor URL: <http://www.saylor.org/courses/me205/>

Attributed to: University of South Florida: Holistic Numerical Methods Institute



Saylor.org

Page 5 of 6

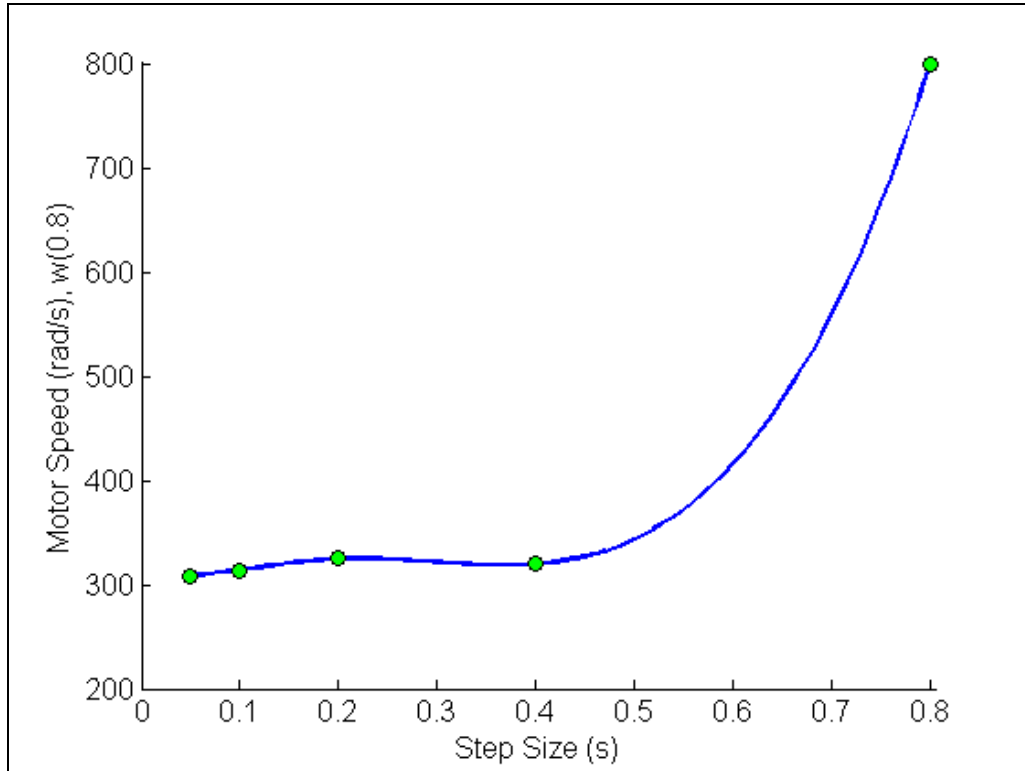


Figure 3 Effect of step size in Euler's method.

The exact solution of the ordinary differential equation is given by

$$w(t) = \left(\frac{1000}{3}\right) - \left(\frac{1000}{3}\right)e^{-3t}$$

The solution to this nonlinear equation at $t = 0.8$ s is

$$w(0.8) = 303.09 \text{ rad/s}$$

